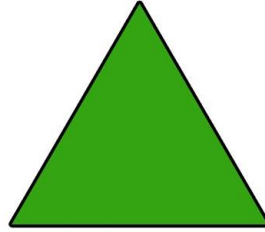
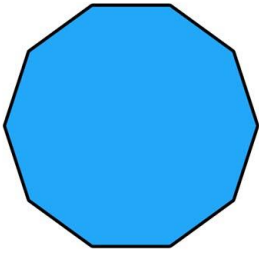



Regular and Irregular Shapes


Write 'regular' or 'irregular' next to each shape, according to the properties of the shape.









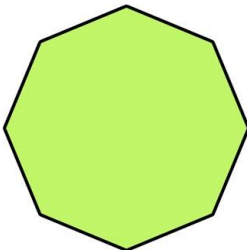















Use mathematical language to explain the difference between regular and irregular shapes.

A regular shape _____

An irregular shape _____

Regular and Irregular Shapes

Answers

Write 'regular' or 'irregular' next to each shape, according to the properties of the shape. Use the Other line to identify each shape.

Regular:

Triangle, decagon, square, pentagon, octagon.

Irregular:

Pink arrow, yellow arrow, hexagon (dark blue), pentagon (turquoise), rectangle.

Use mathematical language to explain the difference between regular and irregular shapes.

Regular shapes have sides and angles that are all equal.

Irregular shapes have sides and angles of different measures.